



Virtual University

About Us

CS402
Solved Final Term Paper 1

Waqar.siddhu@gmail.com

Year
2017

For More Plz Visit

WWW.VirtualAcademyLive.com

بِسْمِ اللَّهِ الرَّحْمَنِ الرَّحِيمِ

In the Name of Allāh, the Most Gracious, the Most Merciful

Paper Pattern

MCQS 40 each 1 mark
Short 4 each 2 marks
Short 4 each 3 marks
long 4 each 5 marks

Question No : 1 of 52

Marks: 1 (Budgeted Time 1 Min)

Which statement is true?

Answer (Please select your correct option)

WWW.VirtualAcademyLive.com

☒ All words are strings

Lec 1,page:4

☐ All strings are words

☐ Both are always same

☐ All letter are string

Made by: Waqar Siddhu

Question No : 2 of 52

Marks: 1 (Budgeted Time 1 Min)

If L1 and L2 are expressed by r1 and r2, respectively then the language expressed by (r1)(r2) will be _____

Answer (Please select your correct option)

WWW.VirtualAcademyLive.com

☒ Regular

Lec:4,page:10

☐ Ir-regular

☐ Undermined

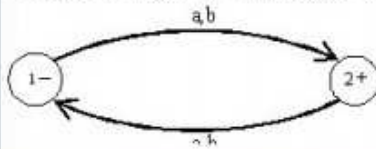
☐ Such language does not exist

Made by: Waqar Siddhu

Question No : 3 of 52

Marks: 1 (Budgeted Time 1 Min)

Below given FA generates the language having strings of _____



Answer (Please select your correct option)

WWW.VirtualAcademyLive.com

☒ ODD length conceptual RE=(a+b)((a+b)(a+b))*

☐ EVEN length

☐ Equal number of a's and b's

☐ Odd number of a's and b's

Made by: Waqar Siddhu

Question No : 4 of 52

Marks: 1 (Budgeted Time 1 Min)

If an FA accepts no string, then language is denoted by _____

Answer (Please select your correct option)

WWW.VirtualAcademyLive.com

☐ {}

☐ ∅

☒ Both {} and ∅ Lec:6,page:16

☐ Null

Made by: Waqar Siddhu

Question No : 5 of 52

Marks: 1 (Budgeted Time 1 Min)

Using tree structure, initial state can be represented by _____

Answer (Please select your correct option)

WWW.VirtualAcademyLive.com

☒ An arrow for J.C.Martin tree structure lec:7,page:18

☐ +

☒ - for simple tree structure lec:7,page:17

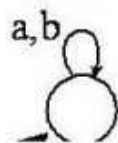
☐ *

Made by: Waqar Siddhu

Question No : 6 of 52

Marks: 1 (Budgeted Time 1 Min)

Below given FA accepts _____ language.



Answer (Please select your correct option)

WWW.VirtualAcademyLive.com

☒ Finite

page 17

☐ Infinite

☐ No

☐ All

Made by: Waqar Siddhu

Question No : 7 of 52

Marks: 1 (Budgeted Time 1 Min)

Even-palindrome is a _____ language

Answer (Please select your correct option)

WWW.VirtualAcademyLive.com

☒ non-regular

conceptual

page 70

☐ regular

☐ regular but infinite

☐ regular but finite

Made by: Waqar Siddhu

Question No : 8 of 52

Marks: 1 (Budgeted Time 1 Min)

If L_1 and L_2 are two regular languages, then _____ is/are also regular.

Answer (Please select your correct option)

WWW.VirtualAcademyLive.com

☒ Both $L_1 \cup L_2, L_1 \cap L_2$

concept

☐ $L_1 \cap L_2$

☐ $L_1 \cup L_2$

☐ $L_1 \cap L_2$

Made by: Waqar Siddhu

Question No : 9 of 52

Marks: 1 (Budgeted Time 1 Min)

Consider the language L of strings, defined over $\Sigma = \{a,b\}$, ending in a

Answer (Please select your correct option)

WWW.VirtualAcademyLive.com

Lec:27,page:76

- ☒ There are finite many classes generated by L, so L is regular
- ☐ There are infinite many classes generated by L, so L is regular
- ☐ There are finite many classes generated by L, so L is non-regular
- ☐ There are infinite many classes generated by L, so L is non-regular

Made by: Waqar Siddhu

Question No : 10 of 52

Marks: 1 (Budgeted Time 1 Min)

Pumping lemma is generally used to prove that:

Answer (Please select your correct option)

WWW.VirtualAcademyLive.com

- ☐ A given language is infinite
- ☒ A given language is not regular
- ☐ Whether two given regular expressions of a regular language are equivalent or not
- ☐ A given language is finite

Conceptual

Made by: Waqar Siddhu

Question No : 11 of 52

Marks: 1 (Budgeted Time 1 Min)

If the FA has N states, then test the words of length less than N. If any one word is accepted by this FA, then it will accept ____ word.

Answer (Please select your correct option)

WWW.VirtualAcademyLive.com

- ☒ All
- ☐ No
- ☐ One
- ☐ Two

Lecture:30,page:85

concept

Made by: Waqar Siddhu

Question No : 12 of 52

Marks: 1 (Budgeted Time 1 Min)

Which of the following pairs of regular expressions are equivalent?

Answer (Please select your correct option)

WWW.VirtualAcademyLive.com

☐ $1(001)^*$ and $(10)^*10$

☒ $x(xx)^*$ and $(x)^*x$

concept

☐ x^* and x^+

☐ x^+ and x^*x^+

Made by: Waqar Siddhu

Question No : 13 of 52

Marks: 1 (Budgeted Time 1 Min)

Which of the following pairs of regular expressions are not equivalent?

Answer (Please select your correct option)

WWW.VirtualAcademyLive.com

☐ $(ab)^*$ and a^*b^*

☐ $x(xx)^*$ and $(xx)^*x$

☒ x^+ and x^*x^+

concept

☐ $x(x)^*$ and $(x)^*x$

Made by: Waqar Siddhu

Question No : 14 of 52

Marks: 1 (Budgeted Time 1 Min)

Which of the following statement is correct?

Answer (Please select your correct option)

WWW.VirtualAcademyLive.com

☒ The length of output string is greater than length of input string in moore machine.

☐ The length of output string is greater than length of input string in mealy machine.

☐ The length of output string is equal to length of input string in moore machine.

☐ The length of output string is less than length of input string in mealy machine.

Made by: Waqar Siddhu

Question No : 15 of 52

Marks: 1 (Budgeted Time 1 Min)

There exist _____ derivations of a certain word in ambiguous grammar.

Answer (Please select your correct option)

WWW.VirtualAcademyLive.com

- ☒ more than one
- ☐ Exactly one
- ☐ exactly two
- ☐ no

Made by: Waqar Siddhu

Question No : 16 of 52

Marks: 1 (Budgeted Time 1 Min)

Which one of the following statements is INCORRECT:

Answer (Please select your correct option)

WWW.VirtualAcademyLive.com

- ☐ $(a+b)^*aa(a+b)^*$ generates Regular language.
- ☒ A language consisting of all strings over $\Sigma=\{a,b\}$ having equal number of a's and b's is a regular language
- ☐ Every language that can be expressed by FA can also be expressed by RE
- ☐ None of these

Lec:26,page:73

Made by: Waqar Siddhu

Question No : 17 of 52

Marks: 1 (Budgeted Time 1 Min)

We can also represent an FA using different states e.g. Accept state, Reject state, Read State etc.
The _____ state behaves as final state of an FA.

Answer (Please select your correct option)

WWW.VirtualAcademyLive.com

- ☒ Accept
- ☐ Pop
- ☐ Push
- ☐ Reject

Lec:37,page:105

Made by: Waqar Siddhu

Question No : 18 of 52

Marks: 1 (Budgeted Time 1 Min)

CYK algorithm was invented by John Cocke and later was published by ____

Answer (Please select your correct option)

WWW.VirtualAcademyLive.com

☐ Talik Khon and Daniel H

☐

☒ Tandao Kasami and Daniel H

Lec:44,page:135

☐

☐ Tandao Dagger and Daniel H

☐

☐ Talik Khon

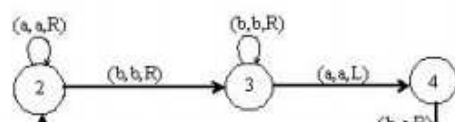
☐

Made by: Waqar Siddhu

Question No : 19 of 52

Marks: 1 (Budgeted Time 1 Min)

Consider the following TM



Answer (Please select your correct option)

WWW.VirtualAcademyLive.com

☐ Above TM accepts the non-CFL { a b c }.

☐

☒ Above TM accepts the non-CFL { a^n b^n }.

Lec:45,page:142

☐

☐ Above TM accepts the non-CFL { a^n b^{2n} }.

☐

☐ Above TM accepts the non-CFL { a^{2n} b^n }.

☐

Made by: Waqar Siddhu

Question No : 20 of 52

Marks: 1 (Budgeted Time 1 Min)

$\Sigma = \{a, b\}$ then string abbabb has length equal to _____.

Answer (Please select your correct option)

WWW.VirtualAcademyLive.com

☐ Three

☐

☐ Four

☐

☐ Five

☐

☒ Six

No.of letters in string= length

☐

Made by: Waqar Siddhu

Question No : 21 of 52

Marks: 1 (Budgeted Time 1 Min)

The language generated by CFG is called _____.

Answer (Please select your correct option)

WWW.VirtualAcademyLive.com

Infinite

☐

Context Free Language (CFL) Lec:31,page:83

☒

Regular

☐

Finite

☐

Made by: Waqar Siddhu

Question No : 22 of 52

Marks: 1 (Budgeted Time 1 Min)

If r_1 and r_2 are regular expressions then $(r_1)(r_2)$ is a _____.

Answer (Please select your correct option)

WWW.VirtualAcademyLive.com

RE

☒

Lec:3,page:9

TG

☐

FA

☐

GTG

☐

Made by: Waqar Siddhu

Question No : 23 of 52

Marks: 1 (Budgeted Time 1 Min)

Which of the following is RE for a language defined over $\Sigma = \{a, b\}$ having words starting with a

Answer (Please select your correct option)

WWW.VirtualAcademyLive.com

$(a + b)^*$

☐

$aa(a + b)^+$

☐

$a(a + b)^*$ lec:4,page:12

☒

$a^*(a + b)$

☐

Made by: Waqar Siddhu

Question No : 24 of 52

Marks: 1 (Budgeted Time 1 Min)

The _____ machine helps in building a machine that can perform the addition of binary numbers.

Answer (Please select your correct option)

WWW.VirtualAcademyLive.com

☒ Incrementing

lec:22,page:60

☐ Complementing

☐ Decrementing

☐ Multiplication

Made by: Waqar Siddhu

Question No : 25 of 52

Marks: 1 (Budgeted Time 1 Min)

Left hand side of a production in Context free grammar (CFG) consists of _____.

Answer (Please select your correct option)

WWW.VirtualAcademyLive.com

☐ One terminal

☐ More than one terminal

☒ One non-terminal

Lec:31,page:87

☐ Terminals and non-terminals

Made by: Waqar Siddhu

Question No : 26 of 52

Marks: 1 (Budgeted Time 1 Min)

A regular language _____.

Answer (Please select your correct option)

WWW.VirtualAcademyLive.com

☐ Must be finite

☐ Must be infinite

☒ Can be finite or infinite

concept

☐ Complex Language

Made by: Waqar Siddhu

Question No : 27 of 52

Marks: 1 (Budgeted Time 1 Min)

If a language can be expressed by a regular expression, then its complement is _____.

Answer (Please select your correct option)

WWW.VirtualAcademyLive.com

☒ Regular lec:23,page:66

☐ Non Regular

☐ Finite

☐ Infinite

Made by: Waqar Siddhu

Question No : 28 of 52

Marks: 1 (Budgeted Time 1 Min)

If a given Context Free grammar (CFG) contains a production of the form $S \rightarrow \Lambda$, then _____

Answer (Please select your correct option)

WWW.VirtualAcademyLive.com

☒ The corresponding CFL is not empty. concept

☐ The corresponding CFL is empty.

☐ The corresponding CFL is not empty if the language is regular

☐ The corresponding CFL is empty and non regular.

Made by: Waqar Siddhu

Question No : 29 of 52

Marks: 1 (Budgeted Time 1 Min)

Can a turing machine's head ever be in the same location in two successive steps?

Answer (Please select your correct option)

WWW.VirtualAcademyLive.com

☐ Yes

☐ Yes but only in finite languages

☐ No

☐ Yes but only in infinite langauges

Made by: Waqar Siddhu

Question No : 30 of 52

Marks: 1 (Budgeted Time 1 Min)

In _____ there are Finite set of states containing exactly one START state and some (may be none) HALT states that cause execution to terminate, when the HALT states are entered.

Answer (Please select your correct option)

WWW.VirtualAcademyLive.com

TG

☐

Turing Machine

☒

Lec 45

GTG

☐

Finite Automata

☐

Made by: Waqar Siddhu

Question No : 31 of 52

Marks: 1 (Budgeted Time 1 Min)

Which of the following statement(s) is/are true or false?

- 1) The turing machine is similar to a finite automaton but with an unlimited and unrestricted memory.
- 2) A Turing machine is a much more accurate model of a general purpose computer.

Answer (Please select your correct option)

WWW.VirtualAcademyLive.com

Statement 1 is true

☒

Both statements true

Statement 2 is true

☐

Both statements (1 & 2) are false

☐

Statement 2 is false

☐

Made by: Waqar Siddhu

Question No : 32 of 52

Marks: 1 (Budgeted Time 1 Min)

We can have more than one parse trees for a given string in case of _____ Context Free Grammar (CFG).

Answer (Please select your correct option)

WWW.VirtualAcademyLive.com

vague

☐

ambiguous

☒

Lec:33,page:95

hazy

☐

simple

☐

Made by: Waqar Siddhu

Question No : 33 of 52

Marks: 1 (Budgeted Time 1 Min)

The language of $a^m b^n$ can be expressed by:

Answer (Please select your correct option)

WWW.VirtualAcademyLive.com

FA

☐

TG

☐

GTG

☐

PDA

☒

concept (non regular language)

Made by: Waqar Siddhu

Question No : 34 of 52

Marks: 1 (Budgeted Time 1 Min)

Which of the following theorem partitions Σ^* into distinct classes?

Answer (Please select your correct option)

WWW.VirtualAcademyLive.com

Decidability theorem

☐

Myhill Nerode theorem

☒

Lec:27,page:75

Kleen's theorem

☐

Emptiness theorem

☐

Made by: Waqar Siddhu

Question No : 35 of 52

Marks: 1 (Budgeted Time 1 Min)

The languages are supposed to be _____ in case of testing pumping lemma.

Answer (Please select your correct option)

WWW.VirtualAcademyLive.com

context free

☐

irregular

☐

both regular and irregular

☐

regular

☒

Made by: Waqar Siddhu

Question No : 36 of 52

Marks: 1 (Budgeted Time 1 Min)

Consider the following Context Free Grammar (CFG):

 $S \rightarrow SXPXY$ $X \rightarrow ZZ$ $Y \rightarrow 1$ $Z \rightarrow 0$

Answer (Please select your correct option)

WWW.VirtualAcademyLive.com

☐ 00100☐ 0010000☒ 001☐ 00010

Made by: Waqar Siddhu

Question No : 37 of 52

Marks: 1 (Budgeted Time 1 Min)

A read state can have _____ outgoing edge/ edges.

Answer (Please select your correct option)

WWW.VirtualAcademyLive.com

☐ 1☐ 2☐ 3☒ Any number of

Lec:38,page:112

Made by: Waqar Siddhu

Question No : 38 of 52

Marks: 1 (Budgeted Time 1 Min)

Which of the following states do not have outgoing edges:

Answer (Please select your correct option)

WWW.VirtualAcademyLive.com

☐ Start☐ Read☐ Pop☒ Accept

Lecture 37

Made by: Waqar Siddhu

Question No : 39 of 52

Marks: 1 (Budgeted Time 1 Min)

Consider the following Context Free Grammar (CFG):

$S \rightarrow 01A$

$A \rightarrow 10B$

$B \rightarrow 0A|11$

Answer (Please select your correct option)

WWW.VirtualAcademyLive.com

☐ 011011

☐ 011011011

☐ 011001011

☐ 011001001011

Made by: Waqar Siddhu

Question No : 40 of 52

Marks: 1 (Budgeted Time 1 Min)

Let us consider the following Turing machine (T_M):

(q, Y, R)

(f, f, L)

(f, f, R)

(q, v, L)

Answer (Please select your correct option)

WWW.VirtualAcademyLive.com

☐ fffggg

☐ fffgggff

☐ fffggg

☐ fffggg

Made by: Waqar Siddhu

Question No : 41 of 52

Marks: 2 (Budgeted Time 4 Min)

What is meant by "Left most Derivation" in context of CFG?

Answer (Please click here to Add Answer)

WWW.VirtualAcademyLive.com

Rich text editor toolbar with icons for bold, italic, underline, text color, background color, bulleted list, numbered list, link, unlink, and a 100% zoom level.

Lec:36,page:103

Made by: Waqar Siddhu

Question No : 42 of 52

Marks: 2 (Budgeted Time 4 Min)

Explain the language L of string, defined over $\Sigma = \{0,1\}$, having double 0's or double 1's?

Answer (Please [click here to Add Answer](#))

WWW.VirtualAcademyLive.com



$(0+1)^*(00+11)(0+1)^*$

Made by: Waqar Siddhu

Question No : 43 of 52

Marks: 2 (Budgeted Time 4 Min)

Consider the language defined by the following regular expression:

$b(a + b)^*a$

What will be the corresponding Context Free Grammar (CFG)?

Answer (Please [click here to Add Answer](#))

WWW.VirtualAcademyLive.com



Lec:32,Page:91

Made by: Waqar Siddhu

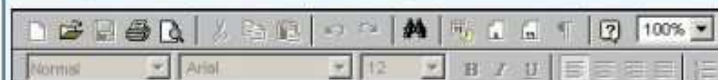
Question No : 44 of 52

Marks: 2 (Budgeted Time 4 Min)

Consider live productions to be applied during derivation of a word. In your point of view what will be the ultimate result?

Answer (Please [click here to Add Answer](#))

WWW.VirtualAcademyLive.com



Lec:43

Made by: Waqar Siddhu

Question No : 45 of 52

Marks: 3 (Budgeted Time 6 Min)

What is meant by the following statement ?

"LANGUAGE IS CLOSED"

Answer (Please [click here](#) to Add Answer)

WWW.VirtualAcademyLive.com



Made by: Waqar Siddhu

Question No : 46 of 52

Marks: 3 (Budgeted Time 6 Min)

Write three different parsing techniques.

Answer (Please [click here](#) to Add Answer)

WWW.VirtualAcademyLive.com



page:136 lec:44

Made by: Waqar Siddhu

Question No : 47 of 52

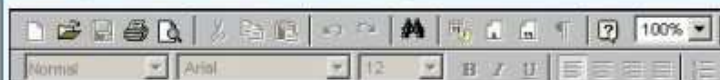
Marks: 3 (Budgeted Time 6 Min)

Illustrate Decidable Problem with the help of an example.

Marks [1+2]

Answer (Please [click here](#) to Add Answer)

WWW.VirtualAcademyLive.com



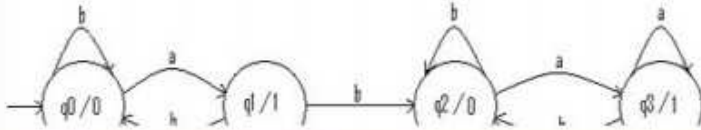
Lec:29,page80

Made by: Waqar Siddhu

Question No : 48 of 52

Marks: 3 (Budgeted Time 6 Min)

Consider the following Moore machine:



Answer (Please click here to Add Answer)

WWW.VirtualAcademyLive.com



Made by: Waqar Siddhu

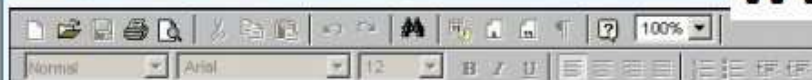
Question No : 49 of 52

Marks: 5 (Budgeted Time 10 Min)

Consider the language L which is EVEN-EVEN, defined over $\Sigma = \{a,b\}$. In how many classes does L may partition Σ^* . Explain briefly.

Answer (Please click here to Add Answer)

WWW.VirtualAcademyLive.com



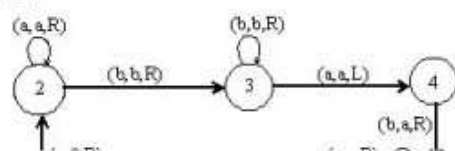
Lec:28,Page:77

Made by: Waqar Siddhu

Question No : 50 of 52

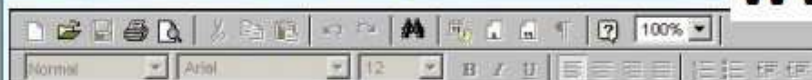
Marks: 5 (Budgeted Time 10 Min)

Consider the following TM



Answer (Please click here to Add Answer)

WWW.VirtualAcademyLive.com



Made by: Waqar Siddhu

Question No : 51 of 52

Marks: 5 (Budgeted Time 10 Min)

Derive Chomsky Normal Form (CNF) corresponding to the Context Free Grammar (CFG) given below:

$A \rightarrow BAB \mid B \mid \Lambda$
 $B \rightarrow 00 \mid \Lambda$

Answer (Please [click here](#) to Add Answer)

WWW.VirtualAcademyLive.com



Made by: Waqar Siddhu

Question No : 52 of 52

Marks: 5 (Budgeted Time 10 Min)

Suppose a Maze of 20 boxes; 1 box for initial and 1 for final state. 6 boxes are for non-moveable states while the rest can be used for transitions. Draw a Nondeterministic Finite Automaton (NFA) for the given Maze.

Marks [2.5+2.5]

Answer (Please [click here](#) to Add Answer)

WWW.VirtualAcademyLive.com



Made by: Waqar Siddhu